

How Many

# ROOT BEER FLOATS?

Math Cards



# Root Beer Float Math Cards

## Instructions

Print pages 3-8 on cardstock. If you want the cards to be reusable, laminate. Cut out cards.

Give student a pencil (or dry erase marker), demonstrate how to use the recipe card to determine the answers for the other cards.

## Terms of Use

This product may be used for your own classroom or personal use.

It may not be shared as a pdf file, on the web, or in any other way.

© TeachingMama.org

Copyright Thanks




# Root Beer Float Recipe


## Makes One Float



1/2 Bottle of  
Root Beer



2 Scoops of  
Ice Cream




1 cup



1 straw


How much do you need  
to make two floats?

2




How much do you need  
to make three floats?

3

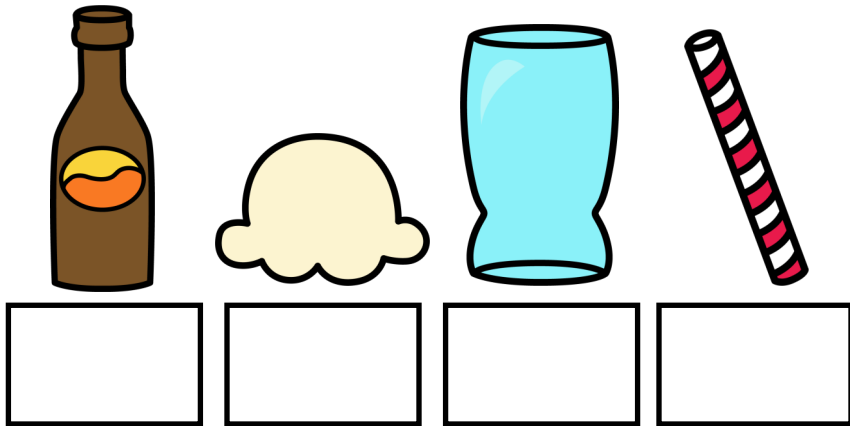


How much do you need  
to make four floats?


4




How much do you need  
to make five floats? 5



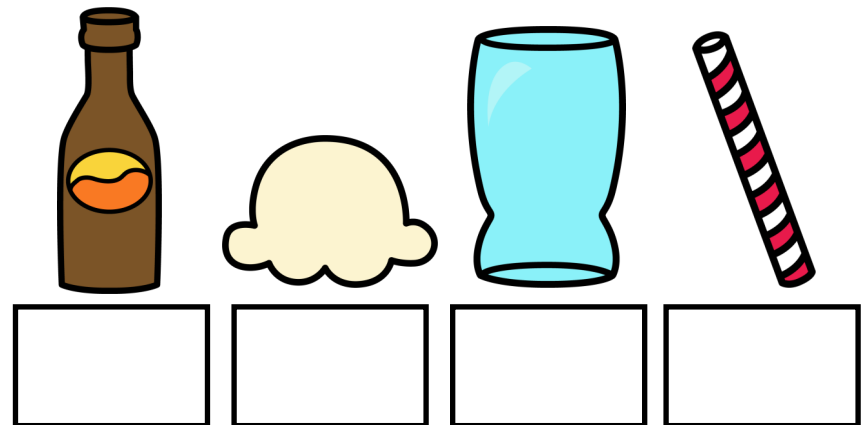
How much do you need  
to make six floats? 6



How much do you need  
to make seven floats? 7





How much do you need  
to make eight floats? 8




How much do you need  
to make nine floats?

9




How much do you need  
to make ten floats?



10





How many floats  
can you make?



How many floats  
can you make?



How many floats  
can you make?





2

6

4

3

How many floats  
can you make?




5

8

4

5

How many floats  
can you make?




4

10

7

5

How many floats  
can you make?





3

12

6

10

How many floats  
can you make?





4

14

8

7

How many floats  
can you make?





6

16

8

9

How many floats  
can you make?




7

18

10

9

How many floats  
can you make?



5

22

10

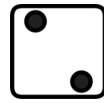


12



Roll the dice four times.

Fill in the numbers.


How many floats can you make?



Roll the dice four times.

Fill in the numbers.



How many floats can you make?



Roll the dice four times.

Fill in the numbers.

How many floats can you make?



Roll the dice four times.

Fill in the numbers.

How many floats can you make?

